

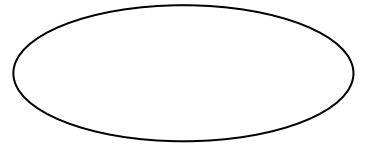
# FIGURAS GEOMÉTRICAS PLANAS

RELACIONA:

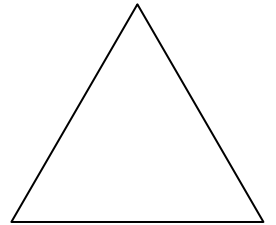
CUADRADO



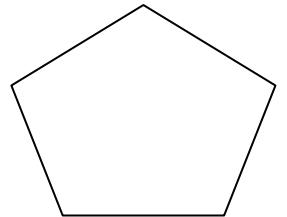
TRIÁNGULO




RECTÁNGULO




ROMBO



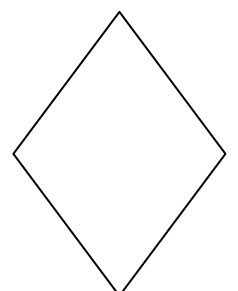
PENTÁGONO



CÍRCULO



ÓVALO





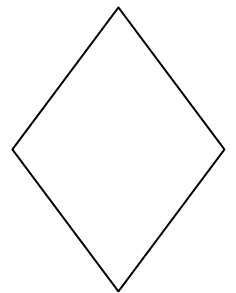
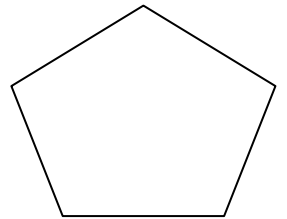
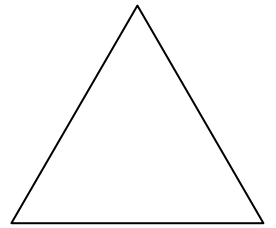
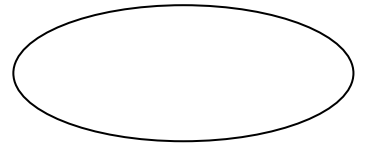

RELACIONA:

TIENE 3 LADOS

TIENE 4 LADOS


TIENE 5 LADOS

NO TIENE LADOS




ESCRIBE SU NOMBRE:

¿CUADRADO O PENTÁGONO?




ES UN .....

¿TRIÁNGULO O RECTÁNGULO?



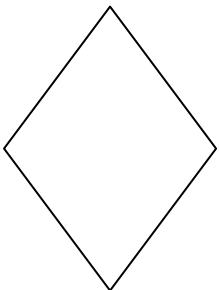
ES UN .....

¿CÍRCULO O CUADRADO?



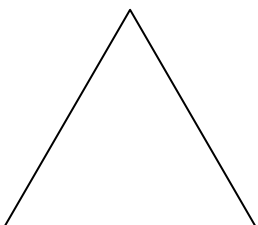
ES UN .....

¿RECTÁNGULO O ROMBO?



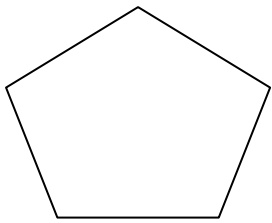
ES UN .....

¿PENTÁGONO O TRIÁNGULO?



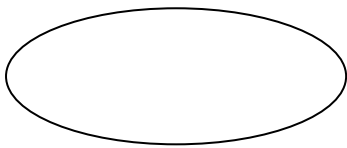
ES UN .....

¿RECTÁNGULO O PENTÁGONO?





ES UN .....

¿ÓVALO O CÍRCULO?



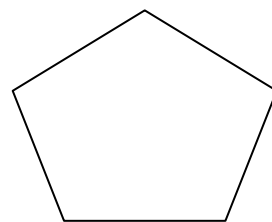
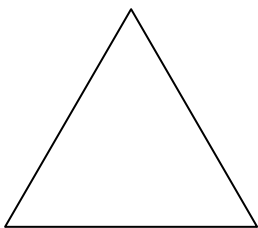
ES UN .....

¿CÓMO SE LLAMAN ESTAS FIGURAS GEOMÉTRICAS?



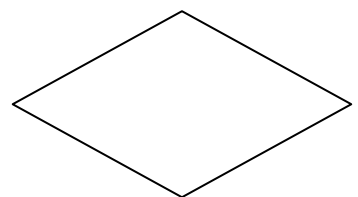

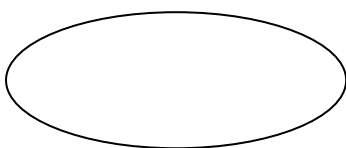
.....

.....



.....

.....



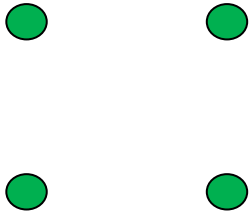
.....

.....

.....

UNE LOS PUNTOS PARA DIBUJAR ESTAS FIGURAS:

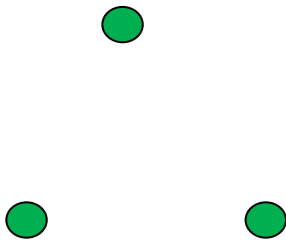
CUADRADO



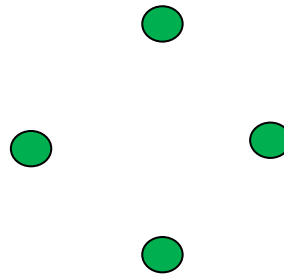
RECTÁNGULO



TRIÁNGULO



CÍRCULO



DIBUJA:

CUADRADO

RECTÁNGULO

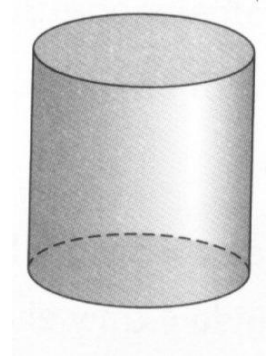
TRIÁNGULO

CÍRCULO


# CUERPOS GEOMÉTRICOS

RELACIONA:

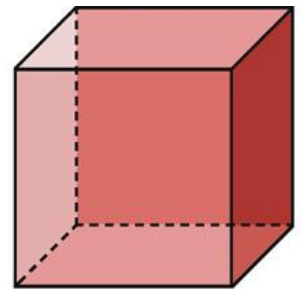
CUBO



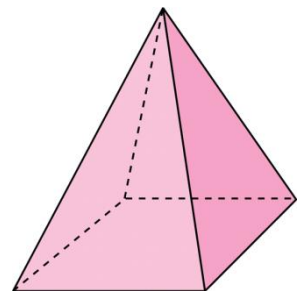
PIRÁMIDE



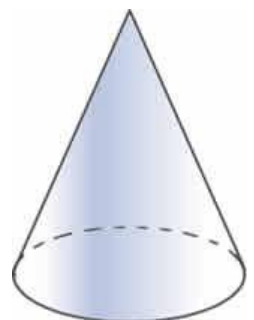
CILINDRO




CONO



ESFERA



# ¿QUÉ FORMA TIENEN ESTOS OBJETOS?





.....


.....

StaloStocks ©



.....

.....



.....



COMPLETA ESTAS FIGURAS SIMÉTRICAS:

