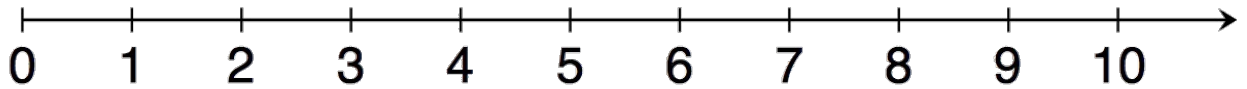
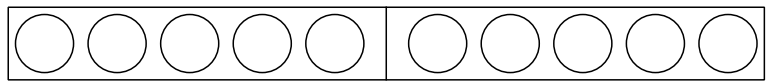


Nombre:

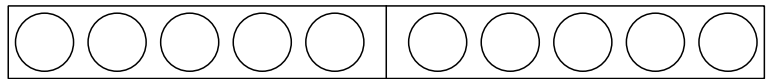


aulapt.org  
Blog de recursos  
para la elaboración de A.C.I.S

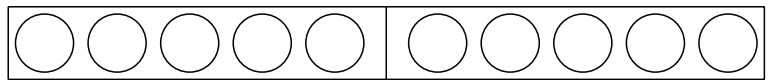
$1 + 1 = \square$



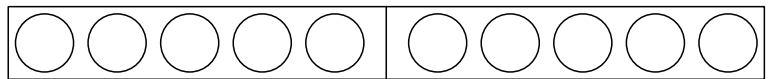
$2 + 2 = \square$



$3 + 2 = \square$



$2 + 1 = \square$



¿Cuántas has  
hecho bien?

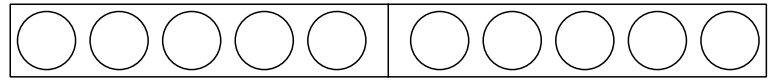


Nombre: \_\_\_\_\_

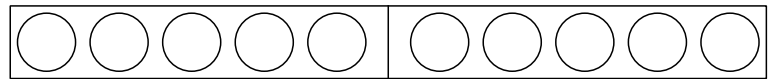


aulapt.org  
Blog de recursos  
para la elaboración de A.C.I.S

$$5 + 1 = \square$$



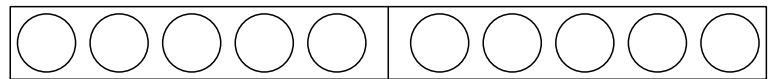
$$2 + 4 = \square$$



$$3 + 3 = \square$$



$$3 + 1 = \square$$



¿Cuántas has  
hecho bien?

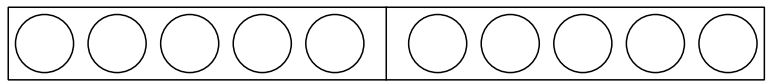


Nombre:

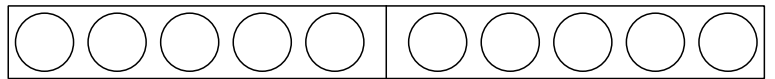


aulapt.org  
Blog de recursos  
para la elaboración de A.C.I.S

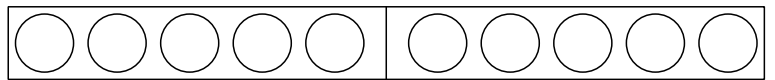
$4 + 2 = \square$




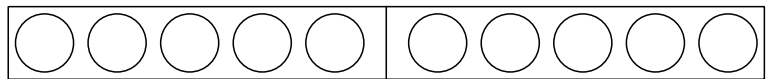
$5 + 2 = \square$



$3 + 4 = \square$



$4 + 1 = \square$



¿Cuántas has  
hecho bien?

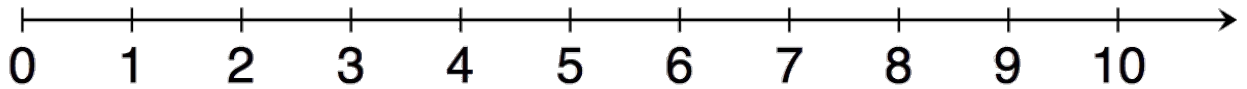
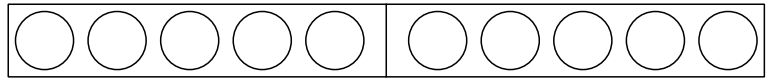


Nombre: \_\_\_\_\_

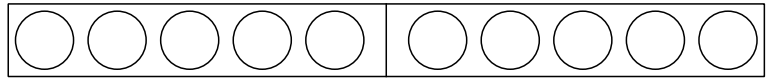


aulapt.org  
Blog de recursos  
para la elaboración de A.C.I.S

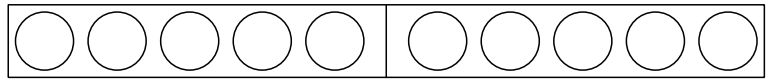
$$4 + 4 = \square$$



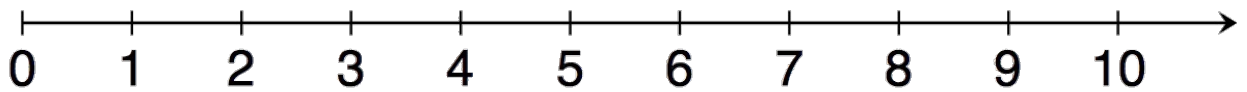
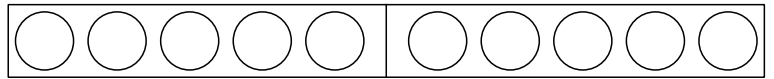
$$5 + 3 = \square$$



$$3 + 6 = \square$$



$$6 + 1 = \square$$



¿Cuántas has  
hecho bien?

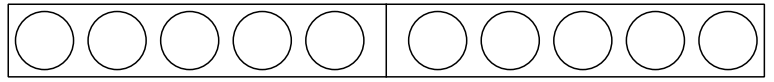


Nombre: \_\_\_\_\_

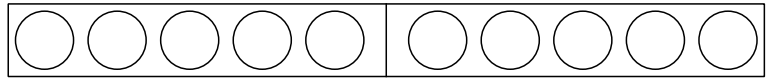


aulapt.org  
Blog de recursos  
para la elaboración de A.C.I.S

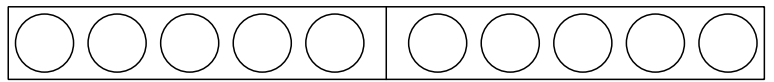
$4 + 1 = \square$



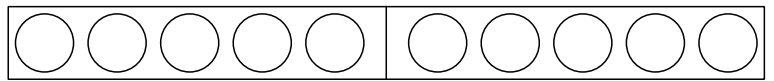
$5 + 1 = \square$



$3 + 2 = \square$



$6 + 3 = \square$



¿Cuántas has  
hecho bien?

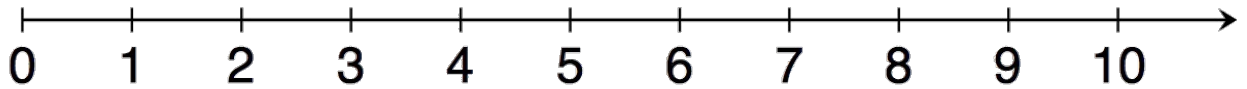
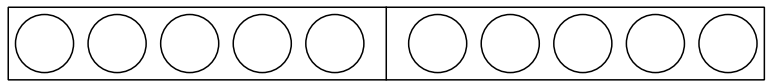


Nombre:

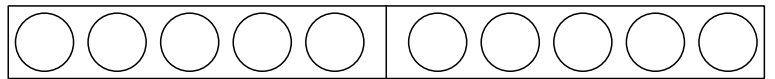


aulapt.org  
Blog de recursos  
para la elaboración de A.C.I.S

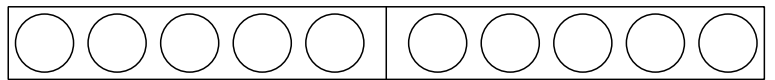
$$5 + 0 = \square$$



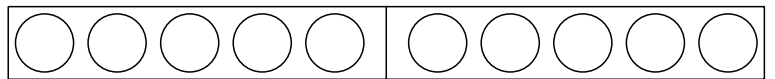
$$4 + 4 = \square$$



$$1 + 4 = \square$$



$$3 + 6 = \square$$



¿Cuántas has  
hecho bien?

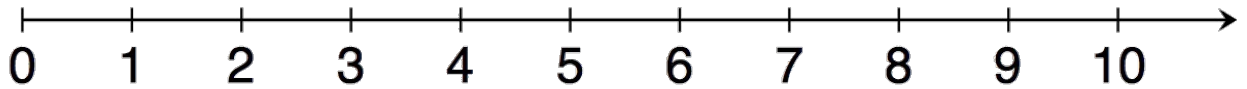
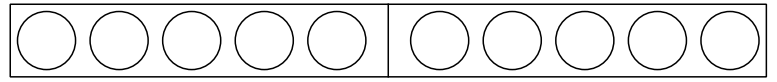


Nombre:

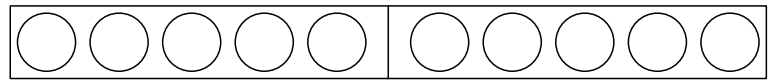


aulapt.org  
Blog de recursos  
para la elaboración de A.C.I.S

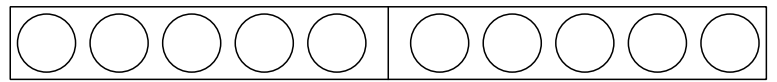
$7 + 1 = \square$



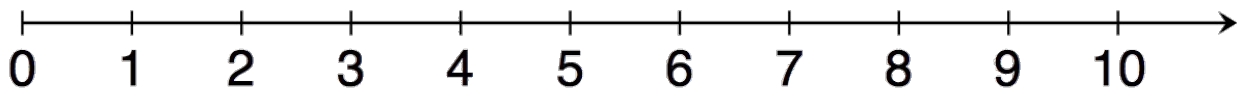
$8 + 2 = \square$



$1 + 7 = \square$



$2 + 6 = \square$



¿Cuántas has  
hecho bien?

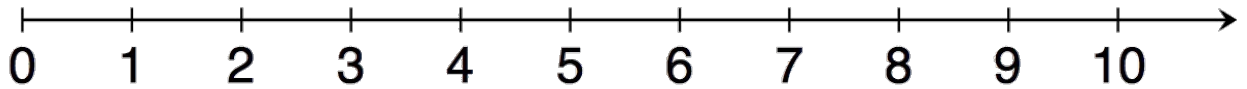
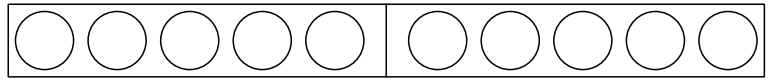


Nombre: \_\_\_\_\_

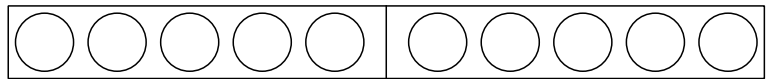


aulapt.org  
Blog de recursos  
para la elaboración de A.C.I.S

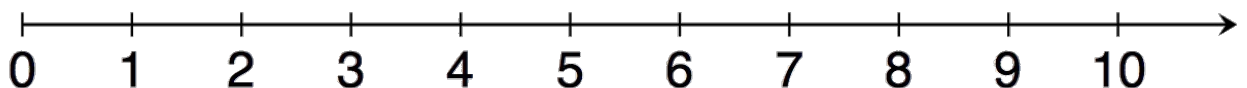
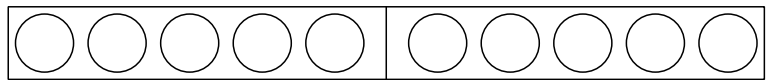
$$6 + 4 = \square$$



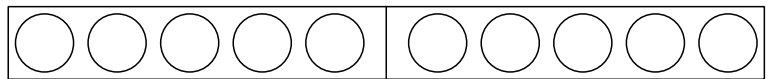
$$4 + 0 = \square$$



$$5 + 4 = \square$$



$$1 + 5 = \square$$



¿Cuántas has  
hecho bien?



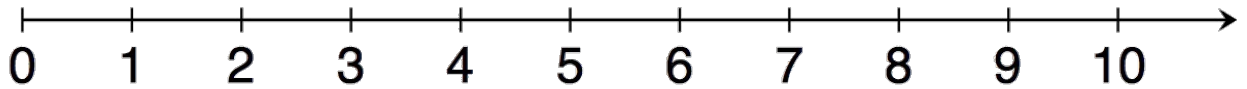
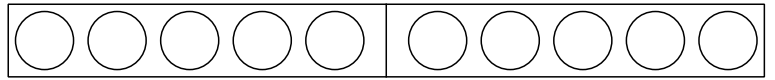


Nombre: \_\_\_\_\_

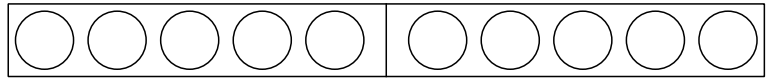


aulapt.org  
Blog de recursos  
para la elaboración de A.C.I.S

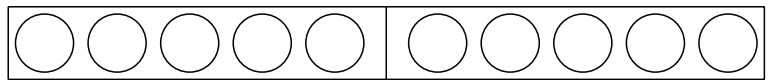
$$4 + 4 = \square$$



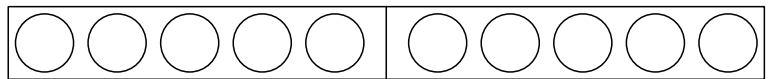
$$8 + 1 = \square$$



$$9 + 0 = \square$$



$$2 + 3 = \square$$



¿Cuántas has  
hecho bien?

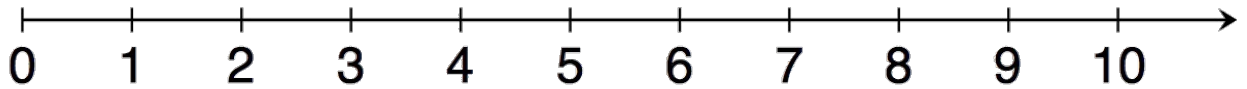
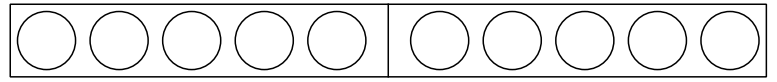


Nombre:

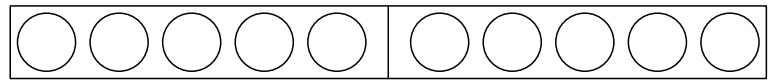


aulapt.org  
Blog de recursos  
para la elaboración de A.C.I.S

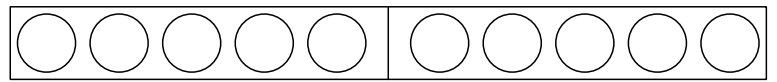
$$5 + 2 = \square$$



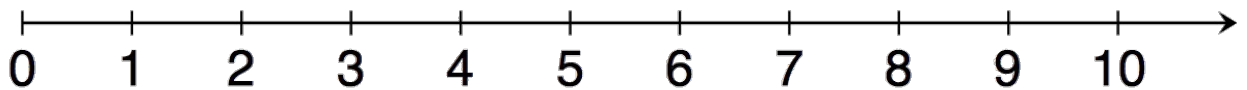
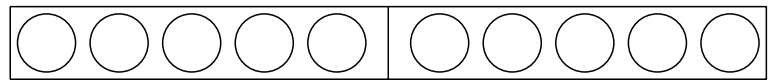
$$2 + 7 = \square$$



$$3 + 6 = \square$$



$$1 + 6 = \square$$



¿Cuántas has  
hecho bien?

