



Calcula cuantos ingredientes en total tiene que echar la bruja a sus pocimas.



13




20

+



15

---



27



16

+



9

---



18



34

+



22

---



29



41

+



33

---

Calcula cuantos ingredientes en total tiene que echar la bruja a sus pocimas.



25



17

+



28

---



42



19

+



36

---




15



29

+



37

---




16



39

+



48

---